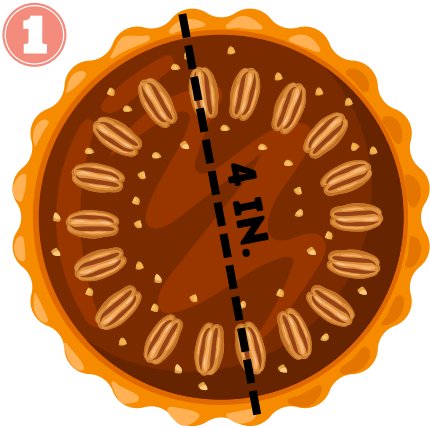





# IT'S EASY AS PI ACTIVITY SHEET

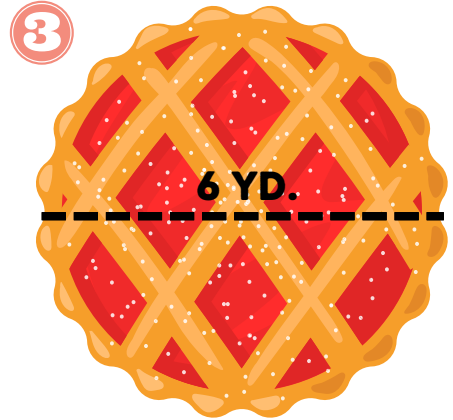
Happy  $\pi$  Day! Calculate the circumference of each pie below. Round your answers to the nearest tenth. (Use  $\pi = 3.14$ )




\_\_\_\_\_



\_\_\_\_\_



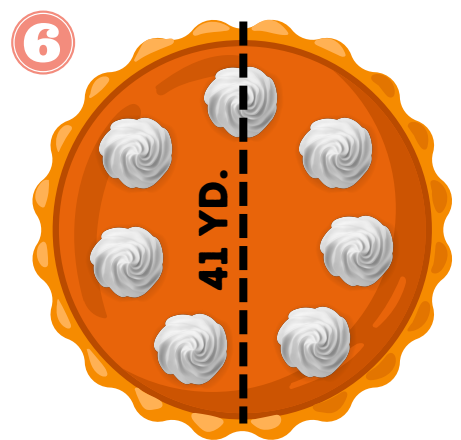
\_\_\_\_\_



\_\_\_\_\_



\_\_\_\_\_



\_\_\_\_\_

Answers: 1. 12.6 in 2. 62.8 ft 3. 18.8 yd 4. 53.38 in 5. 103.6 ft 6. 128.7 yd